

10.2.21

Place Value within 20 Assessment

There are 7 birds in a tree



5 more fly into the tree.

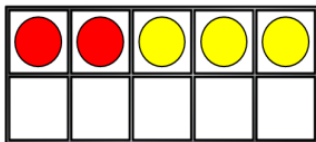
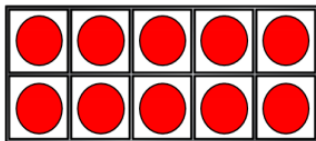


How many birds are there now?

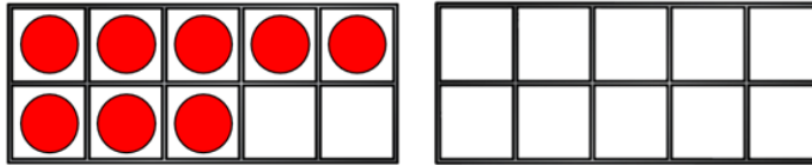
There are ____ birds now.

Complete the number sentence.

$$12 + 3 = \square$$



Mo has 8 counters



He adds 6 more counters.

How many counters does he have now?

Mo has ____ counters now

Join the number sentences
which have the same total.
One has been done for you.

$$15 + 3$$

$$9 + 10$$

$$10 + 9$$

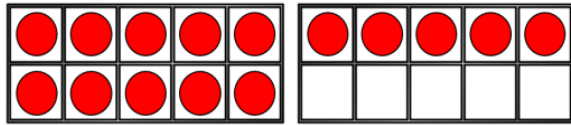
$$11 + 5$$

$$12 + 4$$

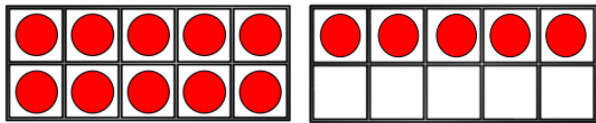
$$13 + 5$$

Work out $6 + 9 = \square$

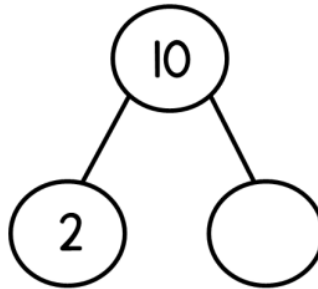
Work out $15 + 4 = \square$



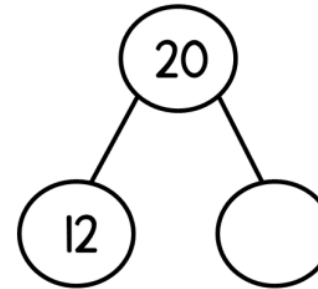
Work out $15 - 4 = \square$



Complete the part-whole models.



$10 = 2 +$



$20 = 12 +$

Well done children! Now it's time to get your purple pencil and check your learning!



Eva has 2 bags of marbles.

She has 20 marbles altogether.

Circle the bags she has.



Complete the number sentences.

$15 + 3 < 15 + \square$

$15 + \square < 19 + \square$