


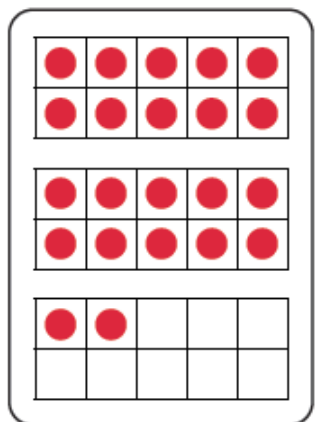

Colour the matching amounts in the same colour. One set has been done.



22

34

twenty-two



3 tens and 4 ones

4 tens and 8 ones

For each number, find a different way to show it.

Mo has been writing numbers in different ways. Tick if he is correct.

3 tens and 4 ones

43


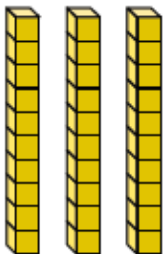
forty-one

3 tens and 5 ones

24

For the pairs you didn't tick, explain why they don't match.

For each clue, use the digits **4**, **6** and **3** to make a 2-digit number less than 50.

Clue	Number
A number which has 3 ones	___ ___
A number which would fit between 	___ ___
A number greater than 40	___ ___
The largest number	___ ___
A number with this many tens: 	___ ___

Write your own clue and answer.